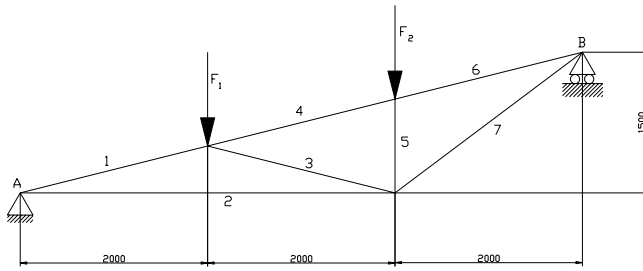


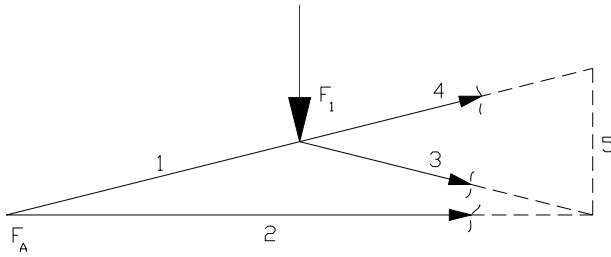
Skizze



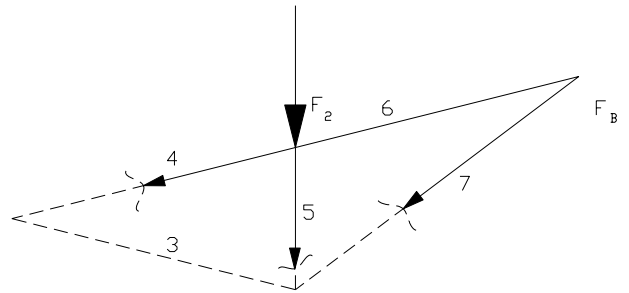
Geg:  $F_1 = F_2 = 20 \text{ kN}$

Ges:  $F_A ; F_B$   
Stabkräfte 2, 3, 4 und 4, 5, 7

Lageskizze 1



Lageskizze 2



Stab 2 ( $\sum M = 0$ )

---

---

---

---

Stab 3 ( $\sum M = 0$ )

---

---

---

---

Stab 4 ( $\sum M = 0$ )

---

---

---

---

Stab 5 ( $\sum M = 0$ )

---

---

---

---

Stab 7 ( $\sum M = 0$ )

---

---

---

---